

Cambridge
International
AS & A Level

Cambridge International Examinations
Cambridge International Advanced Subsidiary and Advanced Level

GEOGRAPHY

9696/12

Paper 1 Core Geography

May/June 2017

INSERT

3 hours

READ THESE INSTRUCTIONS FIRST

This Insert contains the Photographs, Figures and the Table referred to in the questions.



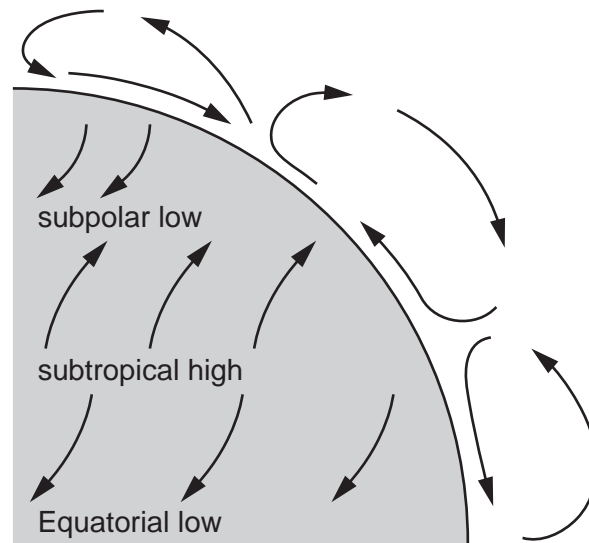
This document consists of **7** printed pages and **1** blank page.

2

Photograph A for Question 1**A fluvial landform**

Fig. 1 for Question 2

A diagram of atmospheric circulation in the Northern Hemisphere



4

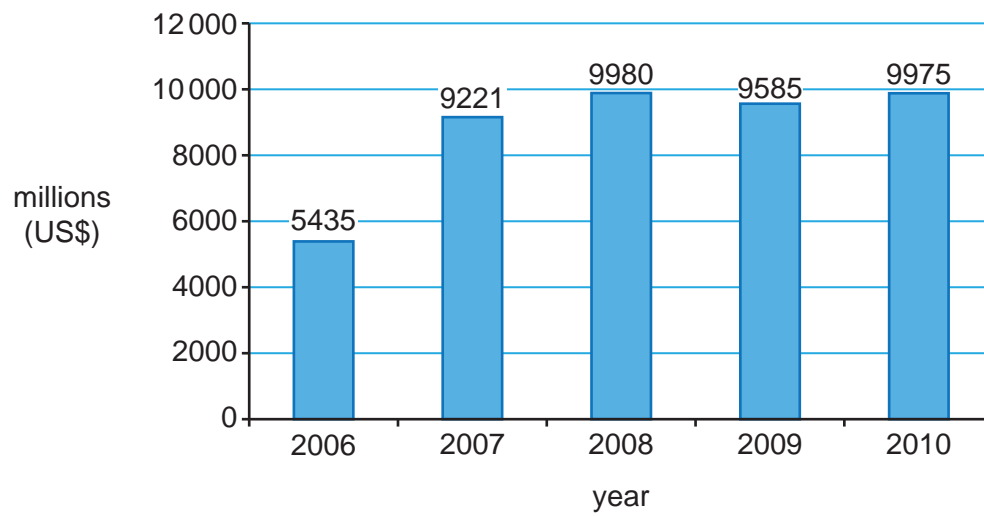
Photograph B for Question 3**A mass movement**

Table 1 for Question 4**Average life expectancy for four continents in 1900, 2001 and 2012**

	Africa	Americas	Asia	Europe
1900	27	41	28	43
2001	51	73	67	77
2012	57	79	68	81

Fig. 2 for Question 5

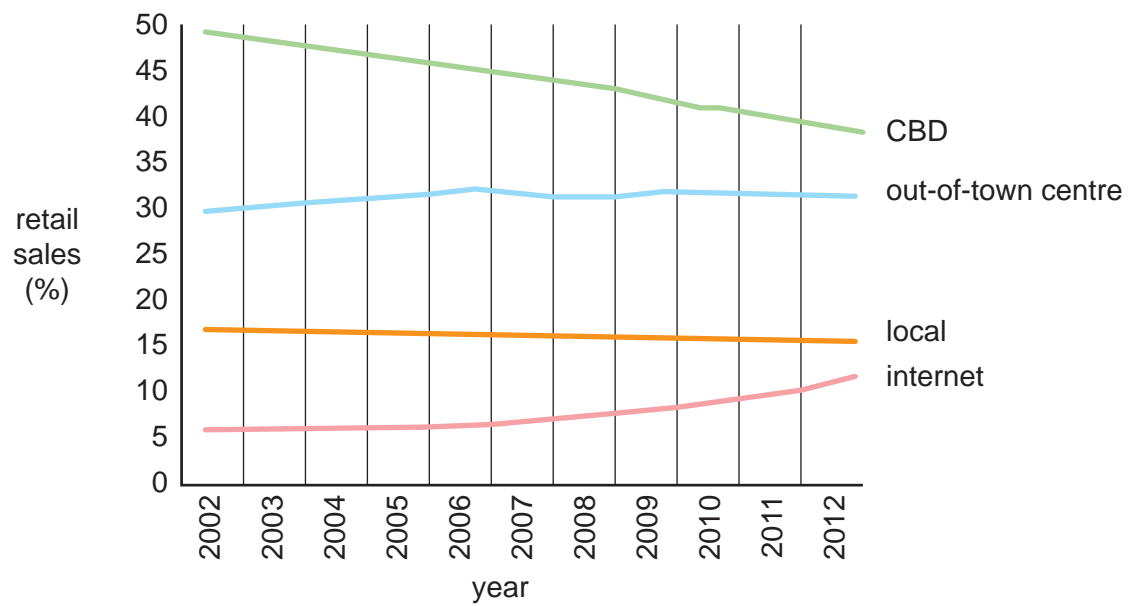
Remittance flows into Nigeria, an LEDC in Africa, 2006–2010



7

Fig. 3 for Question 6

Sales by retail location in an MEDC, 2002–2012



BLANK PAGE

Permission to reproduce items where third-party owned material protected by copyright is included has been sought and cleared where possible. Every reasonable effort has been made by the publisher (UCLES) to trace copyright holders, but if any items requiring clearance have unwittingly been included, the publisher will be pleased to make amends at the earliest possible opportunity.

To avoid the issue of disclosure of answer-related information to candidates, all copyright acknowledgements are reproduced online in the Cambridge International Examinations Copyright Acknowledgements Booklet. This is produced for each series of examinations and is freely available to download at www.cie.org.uk after the live examination series.

Cambridge International Examinations is part of the Cambridge Assessment Group. Cambridge Assessment is the brand name of University of Cambridge Local Examinations Syndicate (UCLES), which is itself a department of the University of Cambridge.